

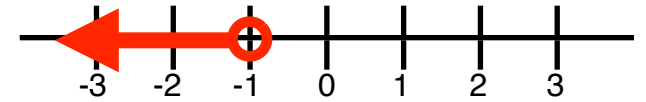
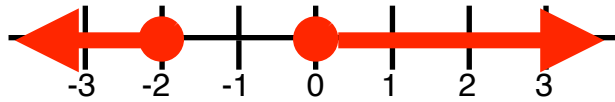
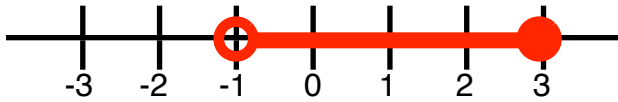
Graph the Following

$$-5 > x$$

$$-5 < x \leq 6$$

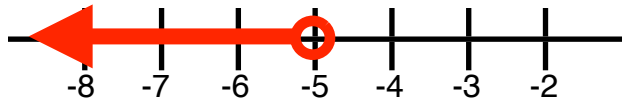
$$x \leq 2 \text{ or } x > 4$$

Write the Inequality

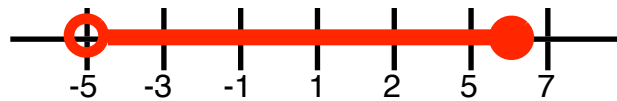


Graph the Following

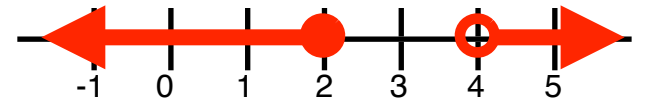
$$-5 > x$$



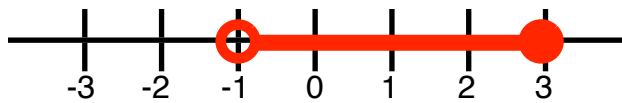
$$-5 < x \leq 6$$



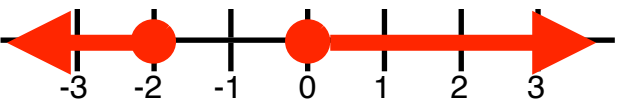
$$x \leq 2 \text{ or } x > 4$$



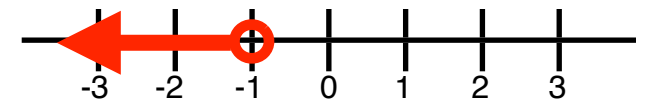
Write the Inequality



$$-1 < x \leq 3$$



$$x \leq -2 \text{ or } x \geq 0$$



$$x < -1$$